


# SKILLS PRACTICE 2

## IMPROPER FRACTIONS

Practice your fraction conversion skills by rewriting the following mixed fractions as improper fractions. Be sure to show your work.


$$5\frac{3}{7}$$

$7 \times 5 = 35$   
 $\downarrow$   
 $35 + 3 = 38$   
 $\downarrow$   
 $\frac{38}{7}$


\_\_\_\_\_


$$2\frac{4}{5}$$

\_\_\_\_\_

$$8\frac{1}{2}$$

\_\_\_\_\_




$$5\frac{2}{5}$$


\_\_\_\_\_


$$4\frac{6}{7}$$

\_\_\_\_\_

$$2\frac{1}{5}$$

\_\_\_\_\_




$$6\frac{2}{3}$$

\_\_\_\_\_

$$1\frac{5}{6}$$

\_\_\_\_\_

$$3\frac{2}{7}$$

\_\_\_\_\_