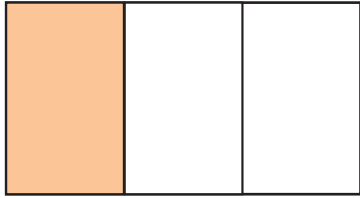
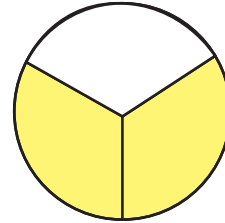



Identifying Thirds

Write the correct fraction term that represents the shaded part of each shape: zero thirds, one third, two thirds, or three thirds.









Write the correct fraction that represents the shaded part of each shape:

$\frac{0}{3}$, $\frac{1}{3}$, $\frac{2}{3}$ or $\frac{3}{3}$

