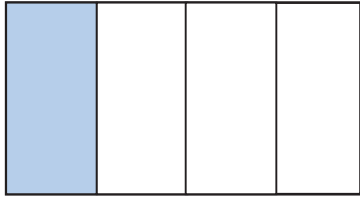
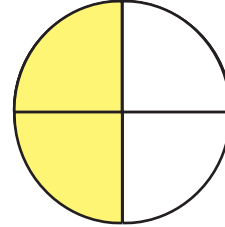
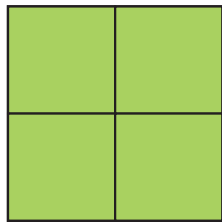


Identifying Fourths

Write the correct fraction term that represents the shaded part of each shape: zero fourths, one fourth, two fourths, three fourths, or four fourths.









Write the correct fraction that represents the shaded part of each shape:

$\frac{0}{4}$, $\frac{1}{4}$, $\frac{2}{4}$ or $\frac{3}{4}$

