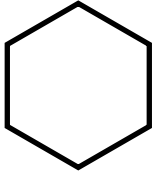


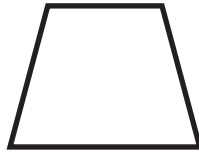
Name: _____


Date: _____

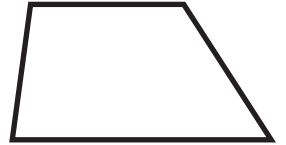
Identify Trapezoids

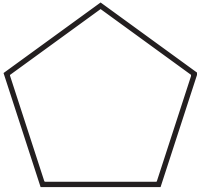
Using the word bank, write the name of each shape below.
Trapezoids are quadrilaterals with only one pair of parallel sides.
Color all the trapezoids **purple**.

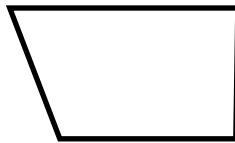




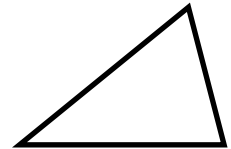


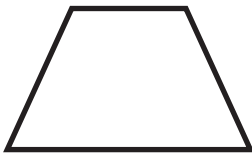


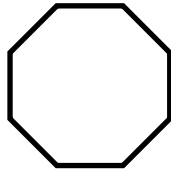






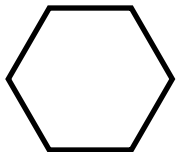


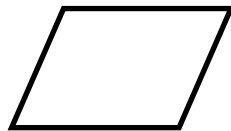


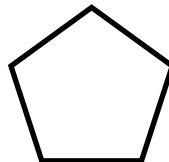


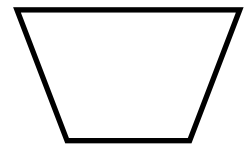












Word Bank

circle hexagon pentagon octagon triangle
rectangle rhombus square trapezoid

