



Hundreds, Tens, and Ones

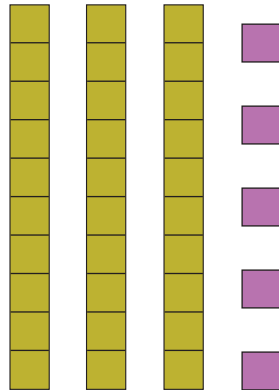
Place value is the value of a digit based on its position in a number.



2 hundreds



3 tens



5 ones

= 235

DIRECTIONS: Count the hundreds, tens, and ones in the images below. Write the numbers in the boxes.

1.

____ hundreds

____ tens

____ ones

= _____

2.

____ hundreds

____ tens

____ ones

= _____

Hundreds, Tens, and Ones

KEEP GOING! Count the hundreds, tens, and ones in the images below. Write the numbers in the boxes.

3.

Two large teal squares (hundreds), eight vertical olive bars (tens), and one small purple square (one).

____ hundreds	____ tens	____ ones	= _____
---------------	-----------	-----------	---------

4.

Five large teal squares (hundreds), five vertical olive bars (tens), and three small purple squares (ones).

____ hundreds	____ tens	____ ones	= _____
---------------	-----------	-----------	---------

5.

One large teal square (hundred), nine vertical olive bars (tens), and six small purple squares (ones).

____ hundreds	____ tens	____ ones	= _____
---------------	-----------	-----------	---------