


Name _____ Date _____



PART 1. Look at the numbers below written as hundreds or tens. Write the numeral.

EXAMPLE: 20 tens = 200

1. 3 hundreds = _____

6. 1 ten = _____

2. 2 tens = _____

7. 10 tens = _____

3. 4 tens = _____

8. 70 tens = _____


4. 7 tens = _____


9. 6 tens = _____


5. 8 hundreds = _____


10. 40 tens = _____

PART 2. Look at the base ten diagrams below. Write the numeral.

EXAMPLE:  = 200



 = _____

 = _____