



# How Much Does It Hold?



1 gallon holds  
**more than 1 liter**



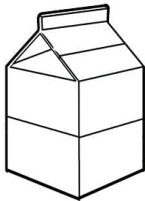


**1 liter**



1 cup holds  
**less than 1 liter**

Draw a circle around all the things that hold **more than 1 liter**.



Draw a square around all the things that hold **less than 1 liter**.

