

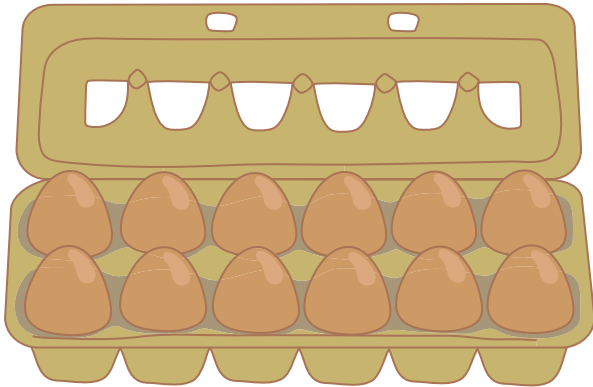
Name: \_\_\_\_\_

Date: \_\_\_\_\_

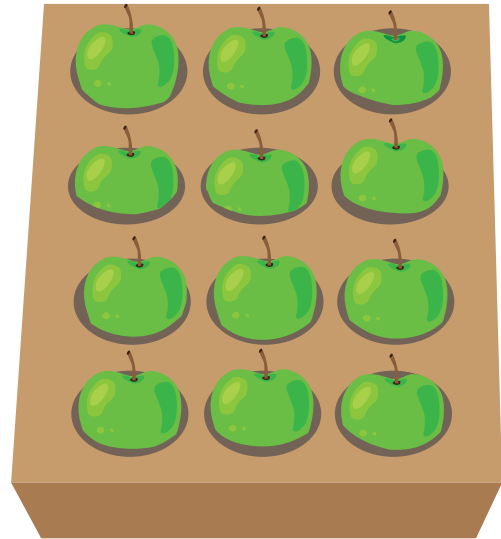
# How Many Are There?

**Directions:** Use a strategy of your choice to figure out how many items there are altogether. Next, think of a repeated addition problem to represent the total amount! Record your answers on the answer sheet.

A.




B.



C.



D.




Name: \_\_\_\_\_

Date: \_\_\_\_\_


E.




F.



G.



H.



Name: \_\_\_\_\_

Date: \_\_\_\_\_

**Recording Sheet**

<b>A)</b>	<b>B)</b>
<b>C)</b>	<b>D)</b>
<b>E)</b>	<b>F)</b>
<b>G)</b>	<b>H)</b>



Name: \_\_\_\_\_

Date: \_\_\_\_\_

**Recording Sheet**

<b>A)</b>	<b>B)</b>
<b>C)</b>	<b>D)</b>
<b>E)</b>	<b>F)</b>
<b>G)</b>	<b>H)</b>