


# Time to the Hour (III)


Name \_\_\_\_\_ Date \_\_\_\_\_

Write the time.


1.



\_\_\_\_\_ o'clock




\_\_\_\_\_ o'clock




\_\_\_\_\_ o'clock


2.



\_\_\_\_\_ o'clock




\_\_\_\_\_ o'clock




\_\_\_\_\_ o'clock


3.



\_\_\_\_\_ o'clock




\_\_\_\_\_ o'clock




\_\_\_\_\_ o'clock


4.



\_\_\_\_\_ o'clock



\_\_\_\_\_ o'clock



\_\_\_\_\_ o'clock