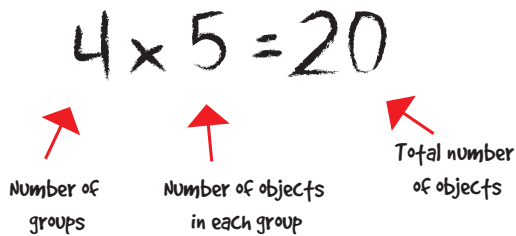


What do you Say, Let's Make an Array!

Directions

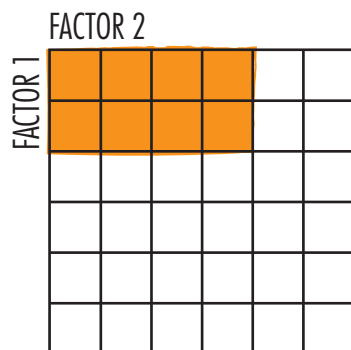
Review what each factor represents in this multiplication sentence:



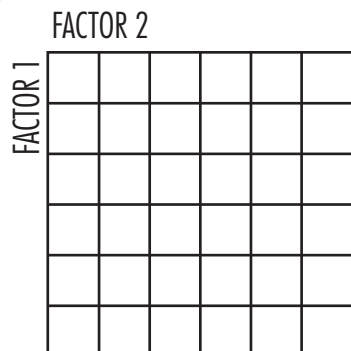
Color in each array. The first array has been colored in for you.

Example

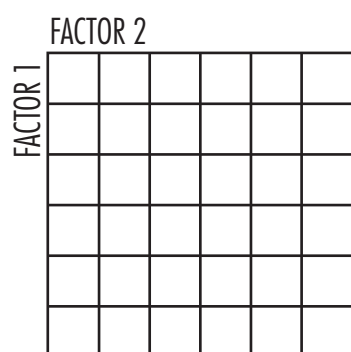
1 $2 \times 4 = 8$



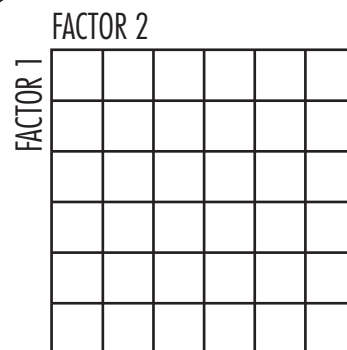
2 $3 \times 5 = 15$




3 $1 \times 2 = 2$



4 $4 \times 4 = 16$



5 $4 \times 5 = 20$



6 $6 \times 5 = 30$

