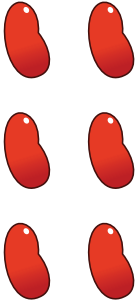

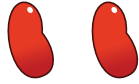



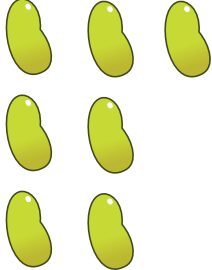







- Let's play hide and seek subtraction.
- Write your answers in the teal box.

| How many beans are there? | If I hide some under the bowl... | How many are left over? | Draw how many are hiding. |
|--|---|---|--|
|  <input data-bbox="407 831 538 978" type="text"/> |  |  <input data-bbox="1186 831 1317 978" type="text"/> | <input data-bbox="1576 831 1707 978" type="text"/> |
|  <input data-bbox="407 1191 538 1338" type="text"/> |  |  <input data-bbox="1186 1191 1317 1338" type="text"/> | <input data-bbox="1576 1191 1707 1338" type="text"/> |
|  <input data-bbox="407 1552 538 1699" type="text"/> |  |  <input data-bbox="1186 1552 1317 1699" type="text"/> | <input data-bbox="1576 1552 1707 1699" type="text"/> |
|  <input data-bbox="407 1912 538 2059" type="text"/> |  |  <input data-bbox="1186 1912 1317 2059" type="text"/> | <input data-bbox="1576 1912 1707 2059" type="text"/> |