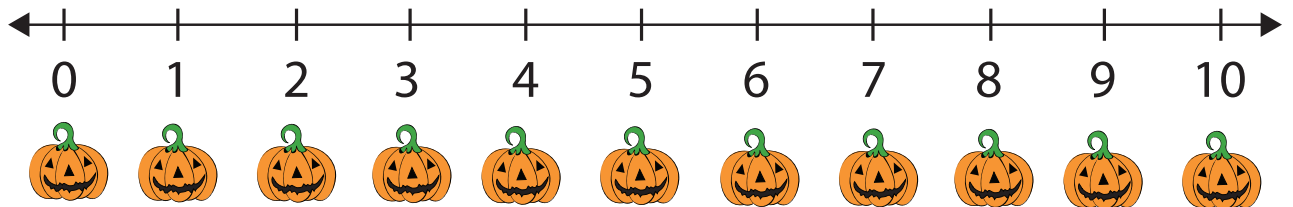


Number Line Word Problems


Use the number lines to help you solve these word problems.

Sara and Nick went to the pumpkin patch yesterday. Sara carved out 2 pumpkins and Nick carved out 3 pumpkins. How many pumpkins were carved in total ?



Answer: _____

Tim went to a haunted house on Halloween night. He saw 5 ghosts in the bedroom and 4 more in the living room. How many ghosts did he see in total ?

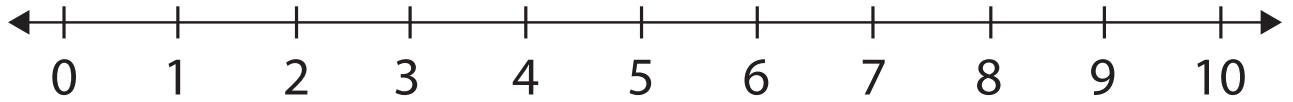



Answer: _____

Number Line Word Problems

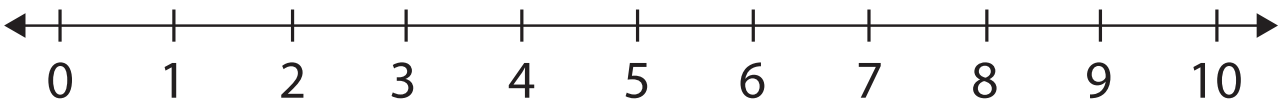
Use the number line to help you solve these word problems.

Sam's mom took him to a haunted house on Halloween night. She asked Sam to count the total number of doors and windows in the house. Sam saw 6 square windows, 3 oval windows and 1 door. How many doors and windows did Sam find in the house ?



Answer: _____

Sam also found a huge spider web inside the haunted house. He wanted to count the spiders so he could tell his mom how many he found. He saw 2 spiders on the web and found 4 more spiders on the wall. How many spiders did he find ?

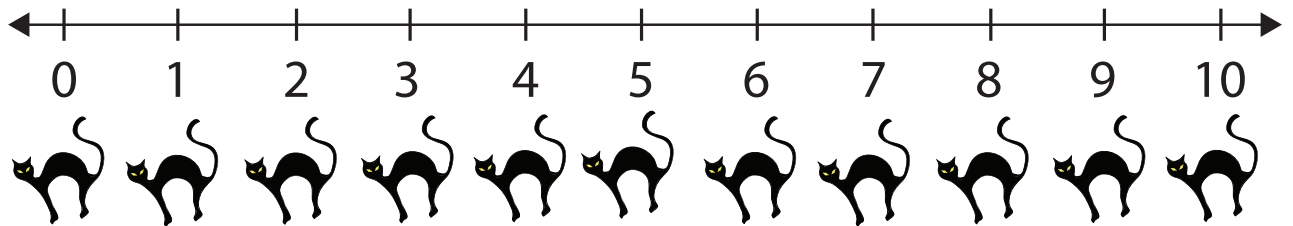


Answer: _____

Number Line Word Problems

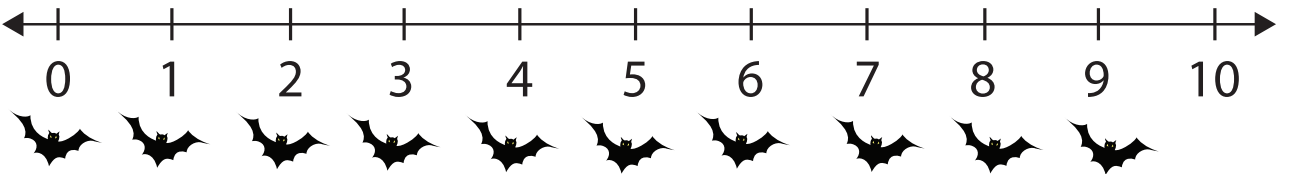

Use the number line to help you solve these word problems.

Roger took his little sister Ria to a graveyard which was behind their house. Ria screamed as she found 5 black cats with shining eyes. Roger ran to his sister and he found 3 more black cats. How many cats did they find in total ?



Answer: _____

There was also a big black tree at the graveyard with many bats sitting on the branches. Roger began to count the bats. He found 7 bats while his sister found 2 more bats. How many bats in total did they find ?



Answer: _____