



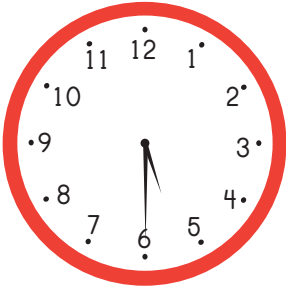
Name _____

Date _____

On the Half Hour: Telling Time with Malcolm Mouse


Circle the correct time.

1.




4:30

5:30



6:30


8:30



1:30


2:30

2.




7:30

6:30



12:30

6:30



2:30

3:30

3.

one-thirty

ten-thirty

nine-thirty

eight-thirty

twelve-thirty

eleven-thirty

