




# At the Grocery Store

Solve each problem by using the grocery store to fill in the equations.



Mimi has 10¢. She bought a banana and a pear. How much does she have left?

$$\underline{\hspace{2cm}} + \underline{\hspace{2cm}} = \underline{\hspace{2cm}} \text{ and } 10 - \underline{\hspace{2cm}} = \underline{\hspace{2cm}}$$

Trudy bought 1 carrot and a apple. How much did she spend?

$$\underline{\hspace{2cm}} + \underline{\hspace{2cm}} = \underline{\hspace{2cm}}$$

Thomas has 8¢. He bought a banana. How much does he have left?

$$\underline{\hspace{2cm}} - \underline{\hspace{2cm}} = \underline{\hspace{2cm}}$$

Coy bought an orange and celery. How much did he spend?

$$\underline{\hspace{2cm}} + \underline{\hspace{2cm}} = \underline{\hspace{2cm}}$$

Ben has 12¢. He bought an apple. How much does he have left?

$$\underline{\hspace{2cm}} - \underline{\hspace{2cm}} = \underline{\hspace{2cm}}$$