


# Greater Gator


Circle the alligator to show whether the first number is greater than or less than the second number.

7




4

9



3

1




4

6



5

3



10