


Greater Gator


Circle the alligator to show whether the first number is greater than or less than the second number.

3




6

8




7

5




4

2



5

8



10
