

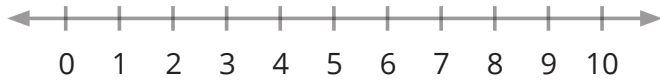
Name _____

Date _____

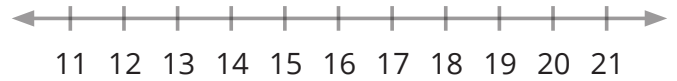
Graph Inequalities



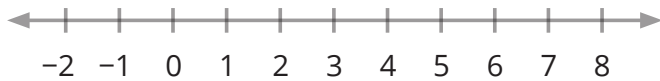
Graph each inequality on the number line.



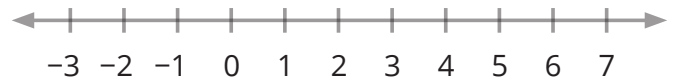
$$x > 5$$



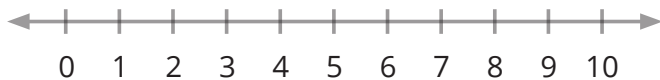
$$x \geq 14$$



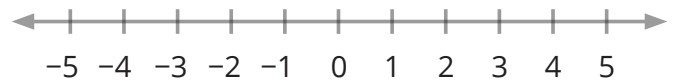
$$x \leq 2$$



$$x < 6$$



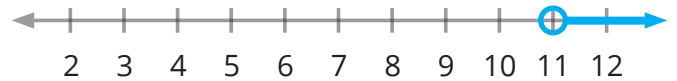
$$x > 7.5$$

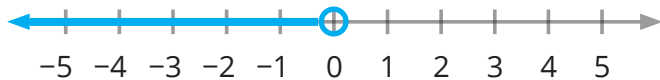


$$x \leq \frac{1}{2}$$

Write the inequality shown.

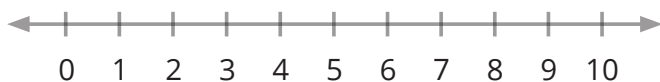




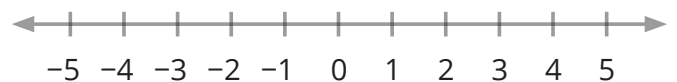




Graph each inequality on the number line. Then write three values of x that make the inequality true.



$$x > 4$$



$$x \leq 1$$
