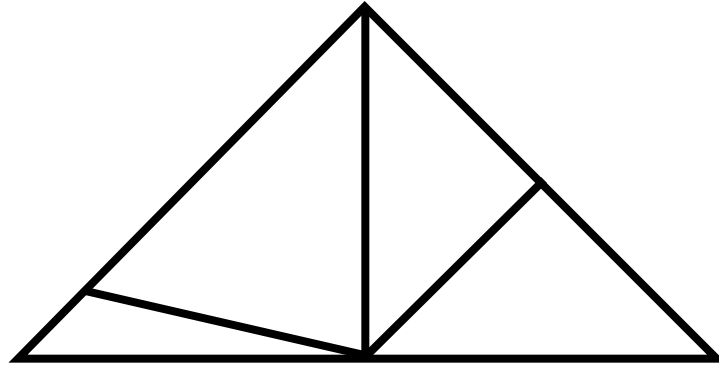


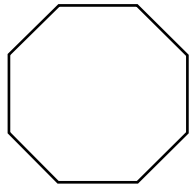
Geometry Review

Use the picture below to answer the following questions.

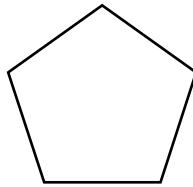


1. How many right angles are there? _____
2. How many obtuse angles are there? _____
3. How many acute angles are there? _____
4. How many equilateral triangles are there? _____
5. How many isosceles triangles are there? _____
6. How many scalene triangles are there? _____

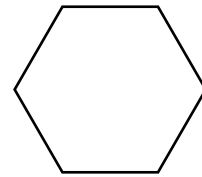
Name each polygon below on the lines provided.



1. _____



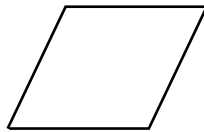
2. _____



3. _____



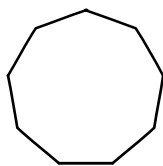
4. _____



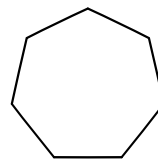
5. _____



6. _____



7. _____



8. _____