



Counting Area

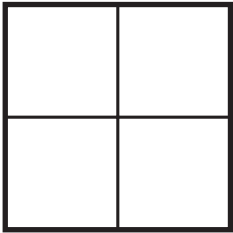
Find the areas below by counting the square units and write down the answers. Then, draw square units to make the area. See the example.




= 1 square unit




= 3 square units




= _____



= _____



= _____



= _____

Now draw 7 square units of area and 8 square units of area.

3 square units																				