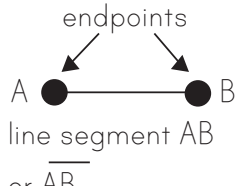
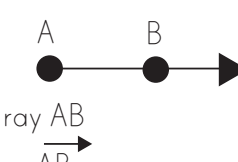
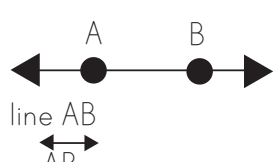
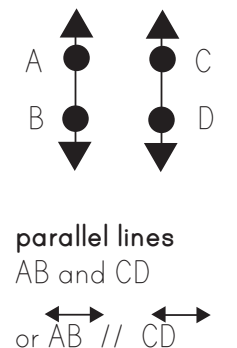
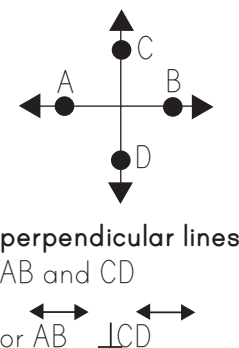
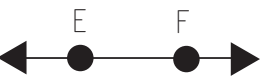


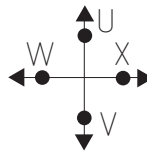

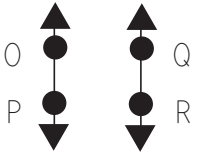

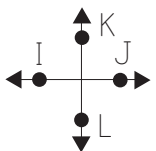




Geometry: Basic Lines

Basic geometry uses **points**, **lines** and **angles**. The most common terms are defined below.

 <p>Line segments have 2 endpoints.</p>	 <p>A ray only has 1 endpoint.</p>	 <p>A line has no ends.</p>	 <p>parallel lines AB and CD or $AB \parallel CD$</p>	 <p>perpendicular lines AB and CD or $AB \perp CD$</p>
---	--	--	--	---

Identify each line below.

				<hr/>
	<hr/>			<hr/>
	<hr/>			<hr/>

Draw each line below.

\overline{AB}	<hr/>	$\overleftrightarrow{KL} \perp \overleftrightarrow{LMN}$	<hr/>
\overrightarrow{CD}	<hr/>	\overrightarrow{OP}	<hr/>
\overleftrightarrow{EF}	<hr/>	$\overleftrightarrow{QR} \parallel \overleftrightarrow{ST}$	<hr/>
$\overleftrightarrow{GH} \parallel \overleftrightarrow{IJ}$	<hr/>	\overline{UV}	<hr/>