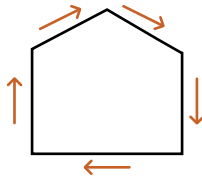
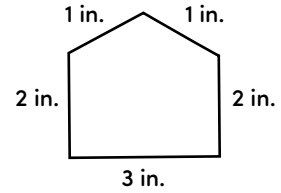


Review: Geometry and Measurement

Perimeter is the distance around a figure.

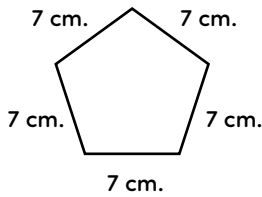


To find the perimeter, add the length of the sides together.

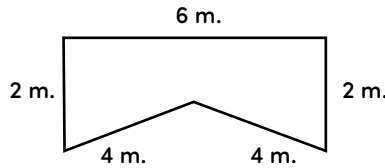


$1 \text{ in.} + 1 \text{ in.} + 2 \text{ in.} + 2 \text{ in.} + 3 \text{ in.} = 9 \text{ in. perimeter}$

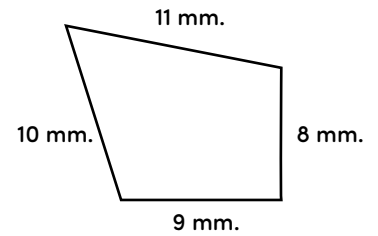
Directions: Find the perimeter (P) for each of the shapes below.



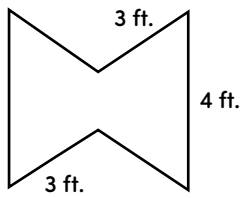
P = _____ centimeters



P = _____ meters



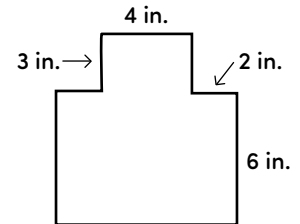
P = _____ millimeters



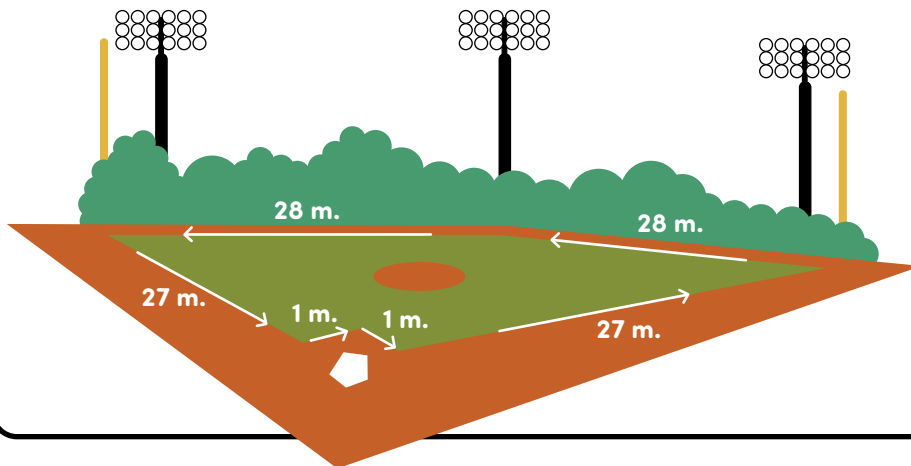
P = _____ feet



P = _____ yards



P = _____ inches



What is the perimeter of the baseball field?

P = _____ meters