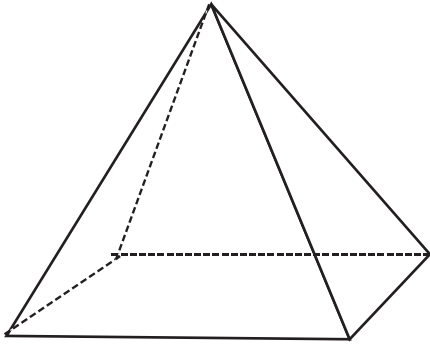


# Solid Shapes

Correctly name each shape and whether or not the shape is polygonal.

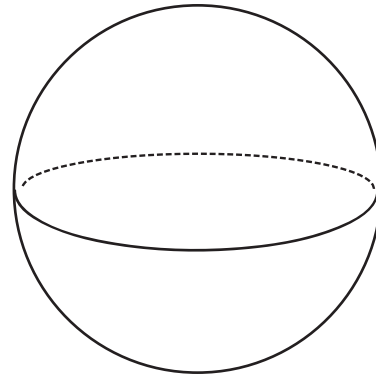
1)



Name of Shape: \_\_\_\_\_

Is this shape a polygon? YES / NO

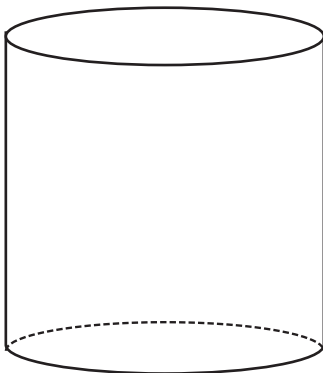
2)



Name of Shape: \_\_\_\_\_

Is this shape a polygon? YES / NO

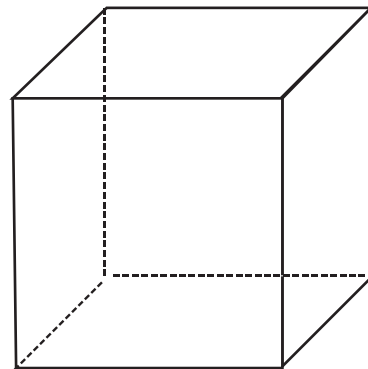
3)



Name of Shape: \_\_\_\_\_

Is this shape a polygon? YES / NO

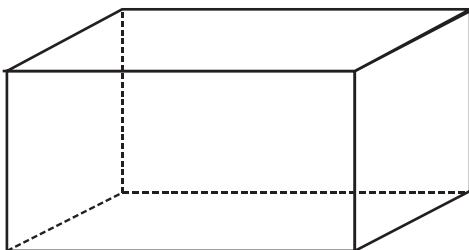
4)



Name of Shape: \_\_\_\_\_

Is this shape a polygon? YES / NO

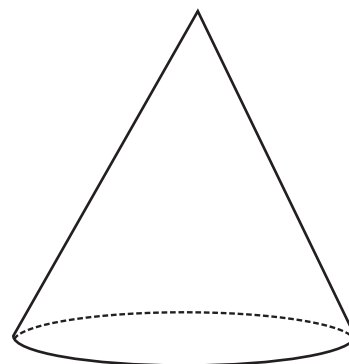
5)



Name of Shape: \_\_\_\_\_

Is this shape a polygon? YES / NO

6)



Name of Shape: \_\_\_\_\_

Is this shape a polygon? YES / NO