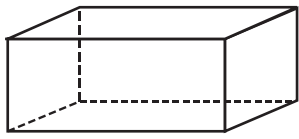


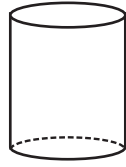
Name _____

Date _____

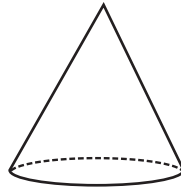
Solid Shapes



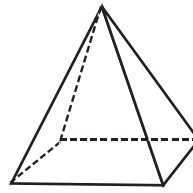
Rectangular Prism



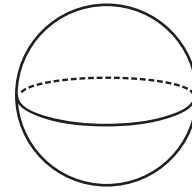
Cylinder



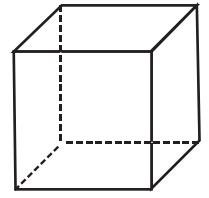
Cone



Pyramid



Sphere



Cube

Write the name of the solid shape each object looks like.

