




Garden Graph

Count how many the rabbit picked.
Color the graph to show the number of each.



9
8
7
6
5
4
3
2
1

