


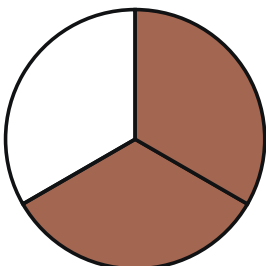
Name _____ Date _____

Understanding Fractions

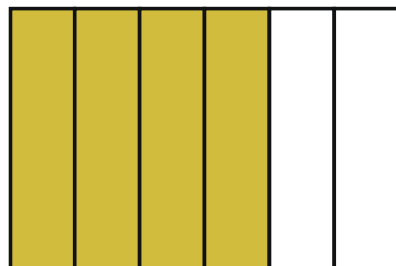
What fraction of each shape has been shaded? Write the fraction under the shape. The first one has been done for you.



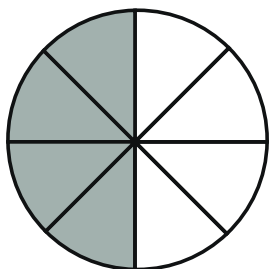
$\frac{1}{2}$




—



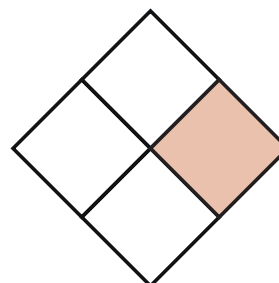
—



—




—

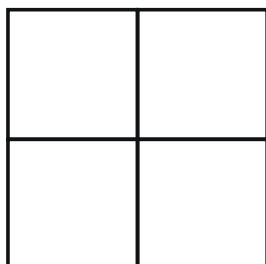


—

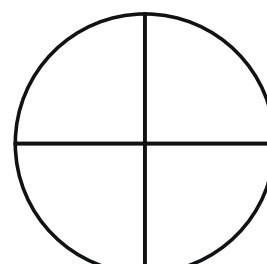
Shade each shape to show the given fraction.



$\frac{2}{6}$



$\frac{3}{4}$



$\frac{2}{4}$