


Grade 1

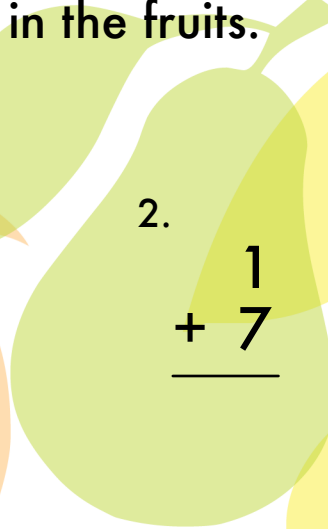
# Fruity Math Blast!

Add the numbers in the fruits.



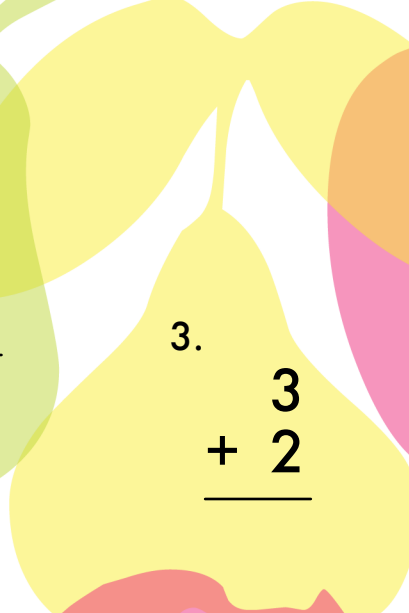
1.

$$\begin{array}{r} 4 \\ + 1 \\ \hline \end{array}$$



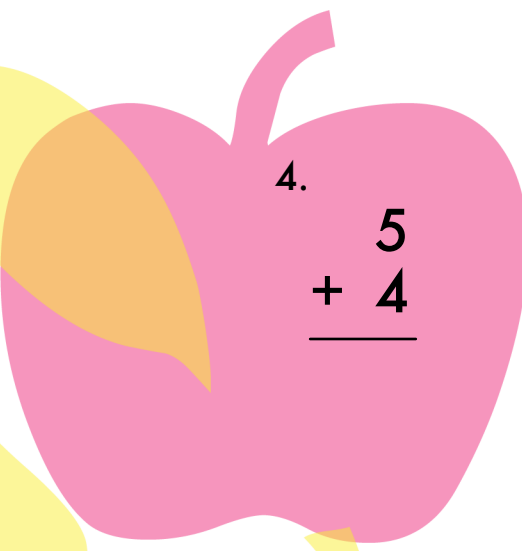
2.

$$\begin{array}{r} 1 \\ + 7 \\ \hline \end{array}$$



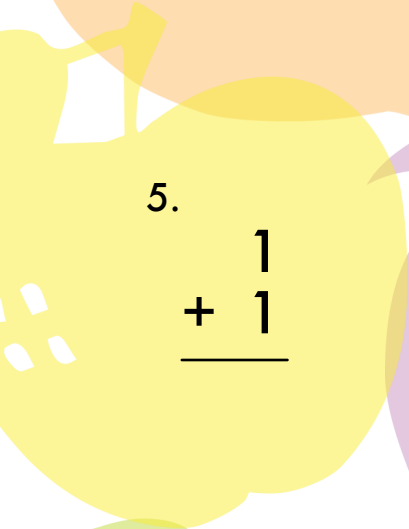
3.

$$\begin{array}{r} 3 \\ + 2 \\ \hline \end{array}$$



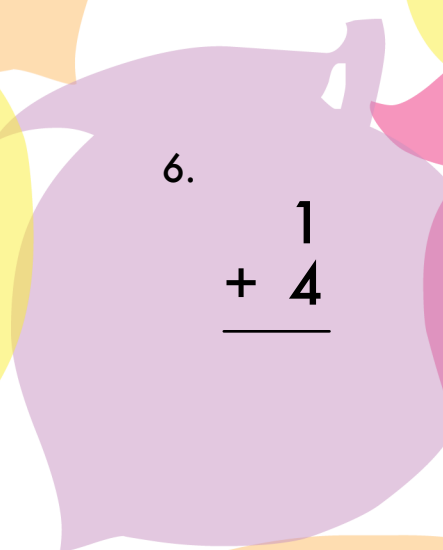
4.

$$\begin{array}{r} 5 \\ + 4 \\ \hline \end{array}$$



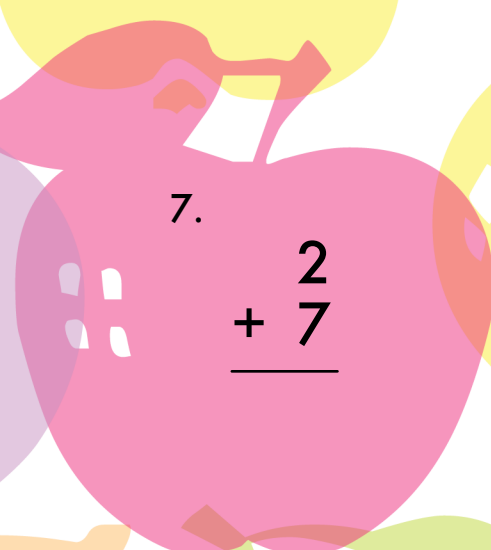
5.

$$\begin{array}{r} 1 \\ + 1 \\ \hline \end{array}$$



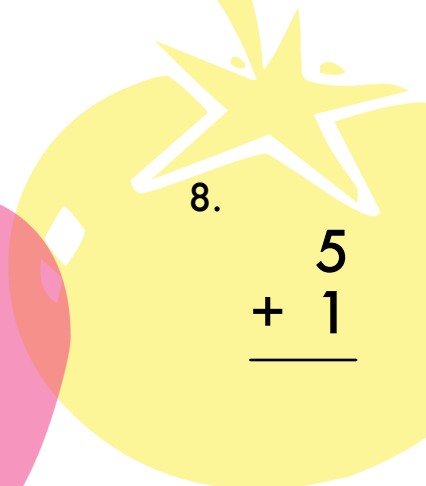
6.

$$\begin{array}{r} 1 \\ + 4 \\ \hline \end{array}$$




7.

$$\begin{array}{r} 2 \\ + 7 \\ \hline \end{array}$$



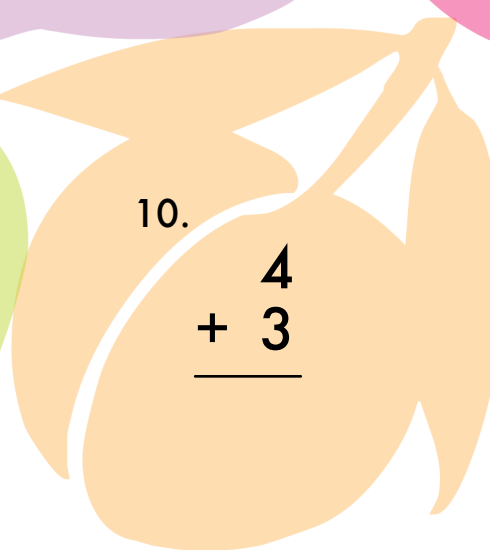
8.

$$\begin{array}{r} 5 \\ + 1 \\ \hline \end{array}$$



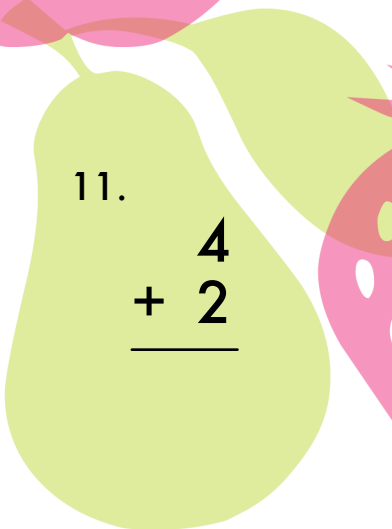
9.

$$\begin{array}{r} 6 \\ + 2 \\ \hline \end{array}$$



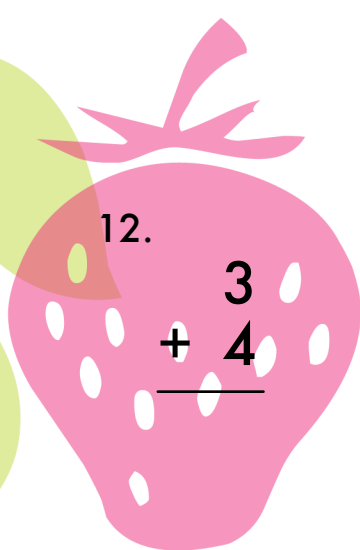
10.

$$\begin{array}{r} 4 \\ + 3 \\ \hline \end{array}$$



11.

$$\begin{array}{r} 4 \\ + 2 \\ \hline \end{array}$$



12.

$$\begin{array}{r} 3 \\ + 4 \\ \hline \end{array}$$