

Fractions of a Set: Spring Things

You can use a **fraction** to represent part of a set.

Let's try an example! What fraction of the eggs are painted?


Count the number of painted eggs: There is 1 egg.

Count the total number of eggs: There are 3 eggs.

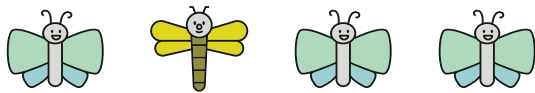
So, **1** out of **3** eggs is painted! Write 1 out of 3 as a fraction:

$$\frac{1}{3}$$

← Number of painted eggs
← Total number of eggs



Write a fraction to answer each question about the sets below.



What fraction of the insects are butterflies?

What fraction of the insects are dragonflies?



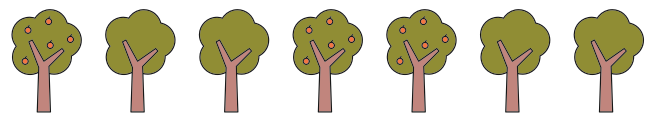
What fraction of the bees have wide black stripes?

What fraction of the bees have thin black stripes?



What fraction of the flowers have one leaf?

What fraction of the flowers have more than one leaf?



What fraction of the trees have fruit?

What fraction of the trees don't have fruit?