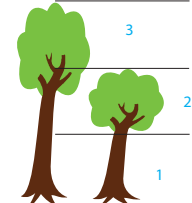
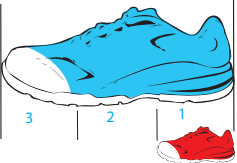


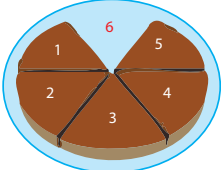
Fraction Practice


Write the correct fraction on the lines below.


1.  The glass is about $\frac{4}{5}$ full of water.

2.  The small tree is only $\frac{2}{3}$ the size of the big tree.

3.  The baby's shoe is $\frac{1}{3}$ the length of the big shoe.

4.  There is $\frac{5}{6}$ of the pie left.

5.  The small box's weight is only $\frac{7}{10}$ of the big box's weight.

6.  The size of the small rectangle is $\frac{1}{4}$ the size of the big rectangle.