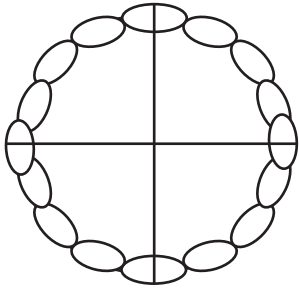


# Pies and Brownies

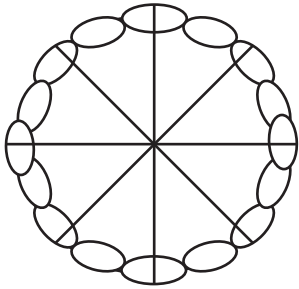
Color the desserts according to the fractions shown. Then answer the questions.



$$\frac{4}{4}$$

Kyle and Bill shared a whole pie.  
They ate  $\frac{4}{4}$  of the pie.

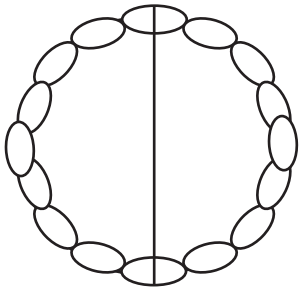
How much of the pie did they eat?



$$\frac{8}{8}$$

Rose and Jane shared a whole pie.  
They ate  $\frac{8}{8}$  of the pie.

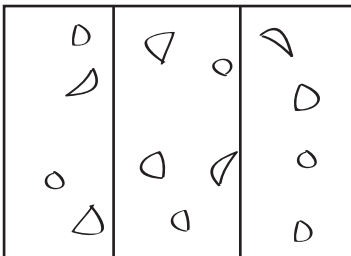
How much of the pie did they eat?



$$\frac{1}{2}$$

Rose and Jane shared a whole pie.  
They ate  $\frac{1}{2}$  of the pie.

How much of the pie was left?



$$\frac{2}{3}$$

Tim and Ted shared a whole brownie.  
They ate  $\frac{2}{3}$  of the brownie.

How much of the brownie was left?

