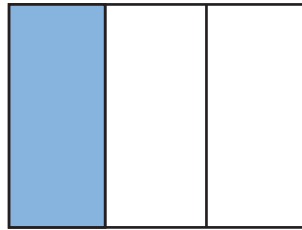
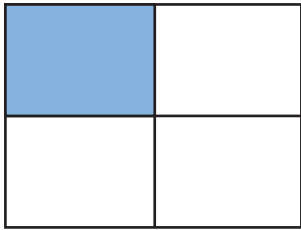


Comparing Fractions

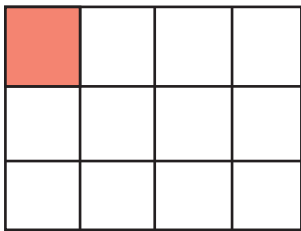
Look at the shaded areas of the pictures below and write the corresponding fractions. Then answer the questions.



A

B

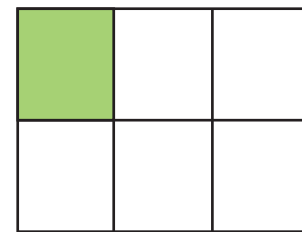
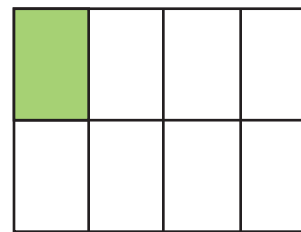
Which fraction is smaller?



A

B

Which fraction is greater?



A

B

Which fraction is smaller?

Now order the fractions above from largest to smallest.

