



Take a Slice

Draw a line from the pizza slices to the matching fraction.



$$\frac{1}{6}$$




$$\frac{2}{5}$$



$$\frac{2}{3}$$



$$\frac{3}{6}$$



$$\frac{1}{2}$$