

# Writing Fractions: $\frac{1}{4}$

Answer the questions below.


Example:

How many pandas are there?


4

What is  $\frac{1}{4}$  of these pandas?

$$\frac{1}{4} \text{ of } 4 = 1$$




How many chicken are there?




What is  $\frac{1}{4}$  of these chicken?

How many pigs are there?




What is  $\frac{1}{4}$  of these pigs?

How many penquins are there?



What is  $\frac{1}{4}$  of these penquins?

How many cats are there?



What is  $\frac{1}{4}$  of these cats