

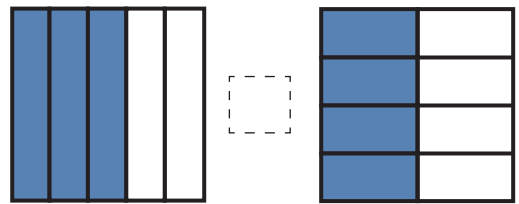
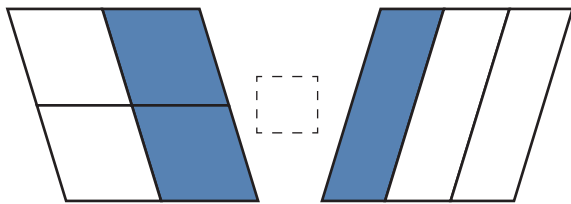
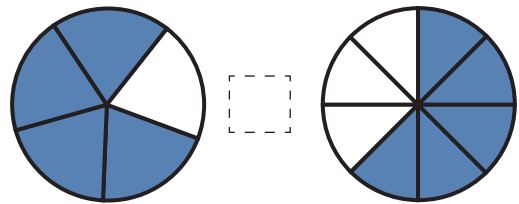
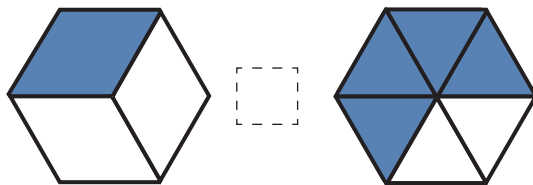
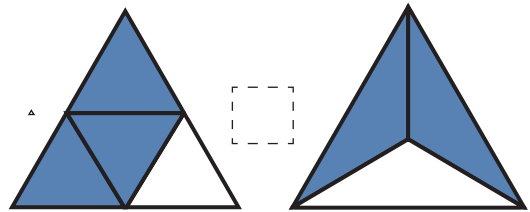
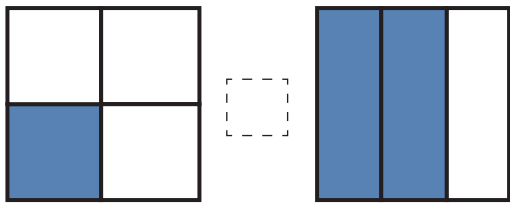
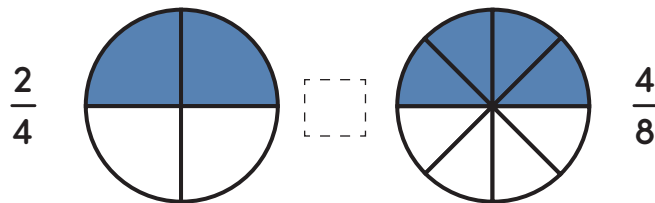
Name: \_\_\_\_\_

Date: \_\_\_\_\_

# Comparing Fractions

For each problem below, write less than (<), greater than (>), or equal to (=) in the space provided to compare the fractions represented by the shapes.

## EXAMPLE:



Rewrite the fractions below in order from smallest to largest.

$\frac{5}{8}$   $\frac{3}{4}$   $\frac{1}{2}$   $\frac{7}{8}$   $\frac{1}{4}$