

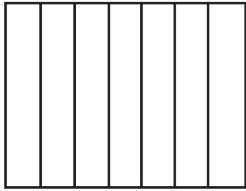
Name _____

Date _____

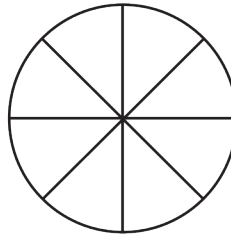
COLOR THE FRACTION

Color the shape to show the fraction.

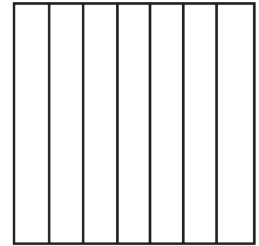
$$\frac{4}{7} =$$



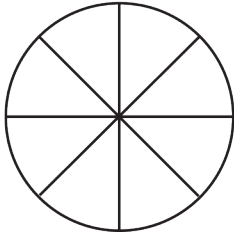
$$\frac{2}{8} =$$



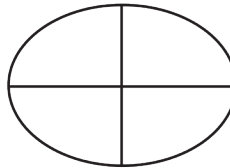
$$\frac{3}{7} =$$



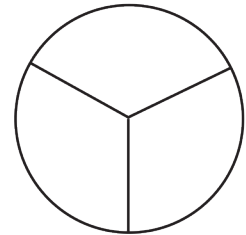
$$\frac{5}{8} =$$



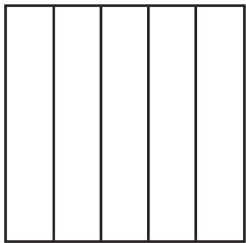
$$\frac{4}{4} =$$



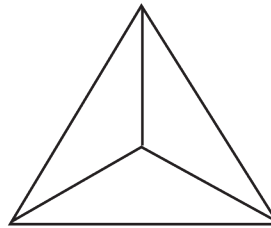
$$\frac{1}{3} =$$



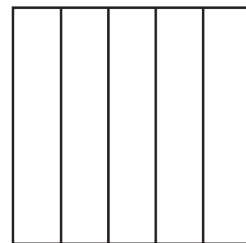
$$\frac{2}{5} =$$



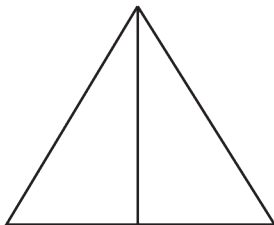
$$\frac{2}{3} =$$



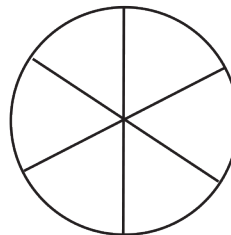
$$\frac{1}{5} =$$



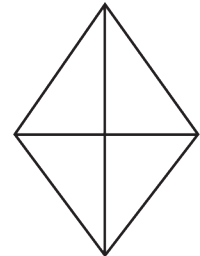
$$\frac{1}{2} =$$



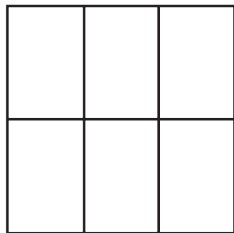
$$\frac{5}{6} =$$



$$\frac{3}{4} =$$



$$\frac{3}{6} =$$



$$\frac{3}{8} =$$



$$\frac{6}{6} =$$

