




# Fraction Action

Answer each question.

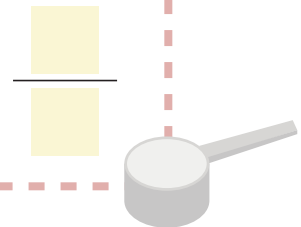
Kiki ate  $\frac{1}{6}$  of the celery sticks. What fraction of the celery sticks is left for Carl to eat?





Fanny picked  $\frac{2}{5}$  of the oranges from the tree. What fraction of the oranges is left for Tina to pick?



Pam poured  $\frac{1}{4}$  cup of sugar into the cake mix. Her mom poured another  $\frac{1}{4}$  cup. How much sugar is in the cake mix?



Gene ate  $\frac{2}{8}$  of the pizza pie. Tommy ate  $\frac{1}{8}$  of the pizza pie. What fraction of the pizza pie was eaten altogether?



Jordan ate  $\frac{3}{9}$  of the crackers. Sam ate  $\frac{4}{9}$  of the crackers. What fraction of the crackers is left?

