


2 groups of roses.


5 roses in each group.

10 roses in total.




Count or multiply the following flowers:

2 groups of 3




$2 \times 3 = \underline{\quad}$

3 groups of 3



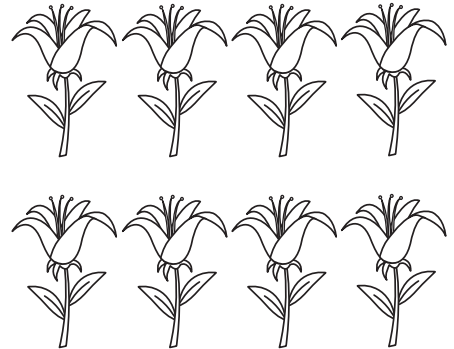
$3 \times 3 = \underline{\quad}$

4 groups of 3




$4 \times 3 = \underline{\quad}$

2 groups of 4




$2 \times 4 = \underline{\quad}$

3 groups of 6



$3 \times 6 = \underline{\quad}$

4 groups of 5



$4 \times 5 = \underline{\quad}$