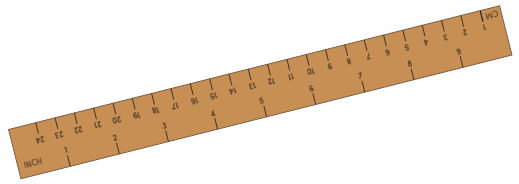


Name _____

Date _____

Determining Relative Length: Shortest to Longest



Number each set of three items from 1 to 3, 1 being the shortest and 3 being the longest. Write the numbers in the boxes below each item.

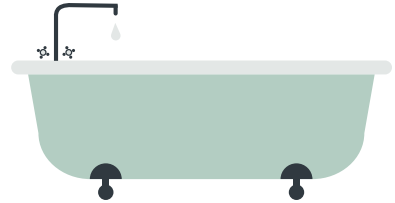
Hanger



Stapler




Bathtub




Spoon



Baseball bat



Toaster



Key



Sunglasses



Bed

