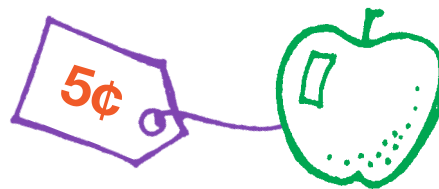

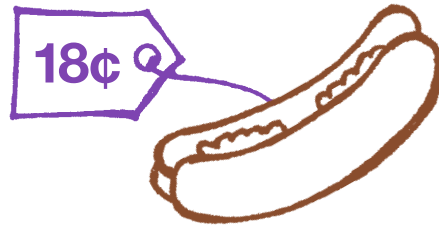


1st Grade Coin Match

Draw a line from one side to the other to match equal amounts of money.



Bonus Question: How many dimes are on this entire page?