


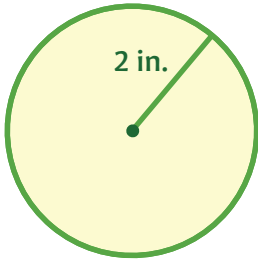
Finding the Area of Circles

You can find the area of a circle using the formula $A = \pi r^2$, where r is the radius of the circle.

Try it! Find the area of each circle below. Use 3.14 for π .

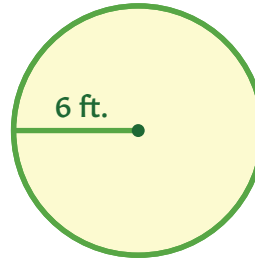


1.



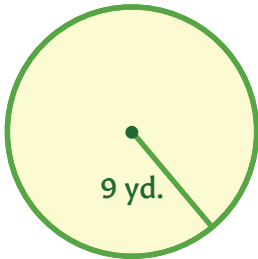
$A \approx$ _____

2.



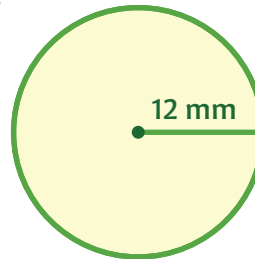
$A \approx$ _____

3.



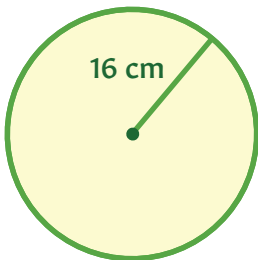
$A \approx$ _____

4.



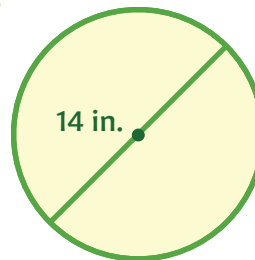
$A \approx$ _____

5.



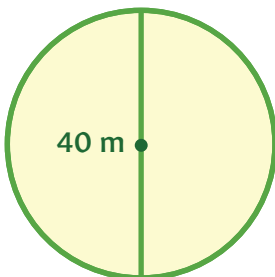
$A \approx$ _____

6.



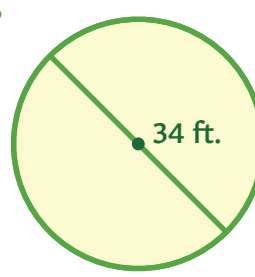
$A \approx$ _____

7.



$A \approx$ _____

8.



$A \approx$ _____