



Finding Percentages #3



Find the percentages for the problems below.



What percent of 200 is 140?

What percent of 500 is 300?

What percent of 150 is 33?

What percent of 65 is 26?


What percent of 130 is 117?

What percent of 40 is 38?

What percent of 200 is 13?

What percent of 80 is 34?

What percent of 500 is 127?



What percent of 750 is 21?