

Find the Halves, Thirds and Fourths

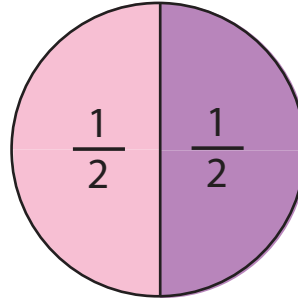
The circles below are divided into halves, thirds or fourths. Write the correct fraction in the blank space .

Example:

I see one whole circle.

$\frac{1}{2}$ of the circle is pink.

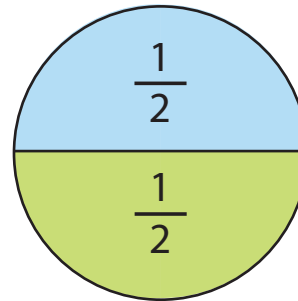
$\frac{1}{2}$ of the circle is purple.



I see one whole circle.

___ of the circle is green.

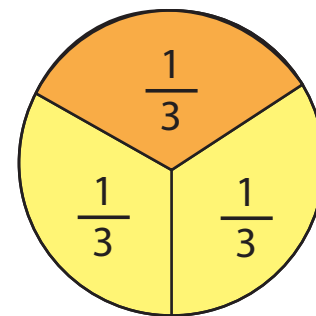
___ of the circle is blue.



I see one whole circle.

___ of the circle is orange.

___ of the circle is yellow.



I see one whole circle.

___ of the circle is pink.

___ of the circle is purple.

