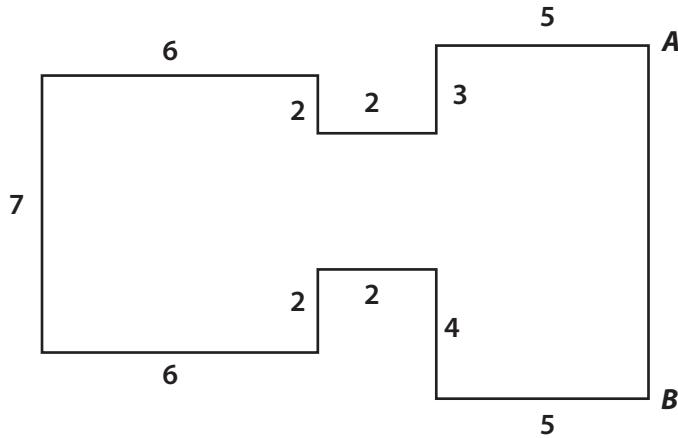


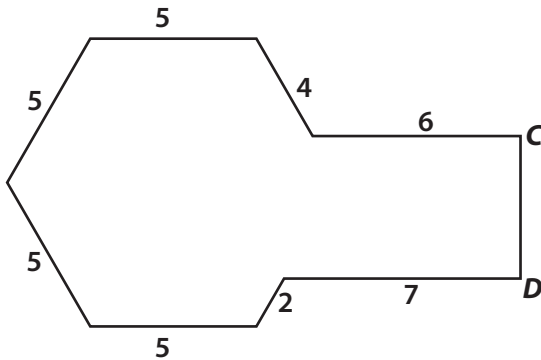
Find The Missing Side

Perimeter is the distance around a shape. It can be found by finding the sum of all the shape's sides. Look at the shapes below. Find the length of the missing sides using the information given. Write your answers in the space provided.



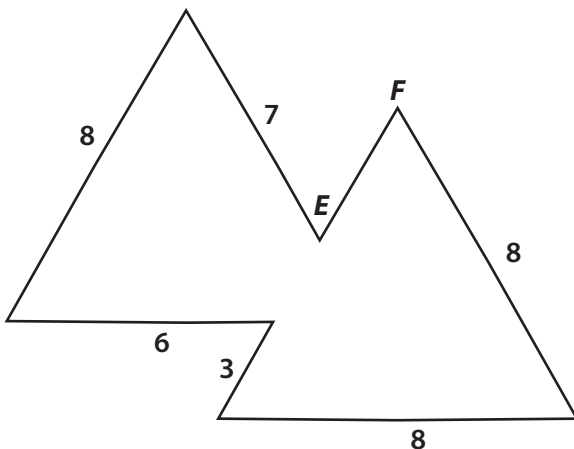
The perimeter of this object is **54** inches long.

Find the length of **AB**.



The perimeter of this object is **43** inches long.

Find the length of **CD**.



The perimeter of this object is **43** inches long.

Find the length of **EF**.