



Find the Missing Numbers: Adding & Subtracting # 5

Some of these numbers are missing! Add or subtract to find the missing number.
See an example below.



$$\begin{array}{r} - 82 \\ \hline 12 \end{array}$$

$$\begin{array}{r} 82 \\ + 12 \\ \hline 94 \end{array}$$




$$\begin{array}{r} + 65 \\ \hline 95 \end{array}$$

*Hint: make sure you put the large number on top when subtracting.


$$\begin{array}{r} 95 \\ - 65 \\ \hline 30 \end{array}$$




$$\begin{array}{r} - 78 \\ \hline 18 \end{array}$$



$$\begin{array}{r} + 43 \\ \hline 90 \end{array}$$



$$\begin{array}{r} + 73 \\ \hline 97 \end{array}$$



$$\begin{array}{r} + 25 \\ \hline 88 \end{array}$$