

FASTER, FASTER!, #9


★ Add the two numbers together to see how many miles per hour (mph) each race car will go.



$$\begin{array}{r} 23 \\ + 75 \\ \hline \end{array} \text{ mph}$$



$$\begin{array}{r} 60 \\ + 27 \\ \hline \end{array} \text{ mph}$$



$$\begin{array}{r} 62 \\ + 24 \\ \hline \end{array} \text{ mph}$$



$$\begin{array}{r} 80 \\ + 17 \\ \hline \end{array} \text{ mph}$$





$$\begin{array}{r} 32 \\ + 63 \\ \hline \end{array} \text{ mph}$$

FASTER, FASTER!, #9

(Continued from page one.)

★ Look at your totals for each car on page one. In the space next to each car below, write down how fast it will go. Which car is the fastest? _____ Which car is the slowest? _____



page two

