

FASTER, FASTER!, #4


★ Add the two numbers together to see how many miles per hour (mph) each race car will go.




$$\begin{array}{r} 71 \\ + 10 \\ \hline \end{array} \text{ mph}$$



$$\begin{array}{r} 14 \\ + 63 \\ \hline \end{array} \text{ mph}$$



$$\begin{array}{r} 18 \\ + 51 \\ \hline \end{array} \text{ mph}$$



$$\begin{array}{r} 35 \\ + 22 \\ \hline \end{array} \text{ mph}$$



$$\begin{array}{r} 65 \\ + 14 \\ \hline \end{array} \text{ mph}$$

FASTER, FASTER!, #4

(Continued from page one.)




Look at your totals for each car on page one. In the space next to each car below, write down how fast it will go. Which car is the fastest? _____ Which car is the slowest? _____




_____ mph



_____ mph



_____ mph



_____ mph



_____ mph

page two

