

# FASTER, FASTER!, #26


★ Add the two numbers together to see how many miles per hour (mph) each race car will go.



$$\begin{array}{r} 56 \\ + 11 \\ \hline \end{array} \text{ mph}$$



$$\begin{array}{r} 80 \\ + 16 \\ \hline \end{array} \text{ mph}$$



$$\begin{array}{r} 47 \\ + 30 \\ \hline \end{array} \text{ mph}$$



$$\begin{array}{r} 72 \\ + 17 \\ \hline \end{array} \text{ mph}$$





$$\begin{array}{r} 80 \\ + 19 \\ \hline \end{array} \text{ mph}$$

# FASTER, FASTER!, #26

(Continued from page one.)

★ Look at your totals for each car on page one. In the space next to each car below, write down how fast it will go. Which car is the fastest? \_\_\_\_\_ Which car is the slowest? \_\_\_\_\_



page two

