

FASTER, FASTER!, #2


★ Add the two numbers together to see how many miles per hour (mph) each race car will go.



$$\begin{array}{r} 14 \\ + 13 \\ \hline \end{array} \text{ mph}$$



$$\begin{array}{r} 43 \\ + 15 \\ \hline \end{array} \text{ mph}$$



$$\begin{array}{r} 81 \\ + 12 \\ \hline \end{array} \text{ mph}$$



$$\begin{array}{r} 35 \\ + 20 \\ \hline \end{array} \text{ mph}$$



$$\begin{array}{r} 54 \\ + 40 \\ \hline \end{array} \text{ mph}$$




page one

(Continued on page two.)

FASTER, FASTER!, #2

(Continued from page one.)

★ Look at your totals for each car on page one. In the space next to each car below, write down how fast it will go. Which car is the fastest? _____ Which car is the slowest? _____



page two

