

FASTER, FASTER!, #18


★ Add the two numbers together to see how many miles per hour (mph) each race car will go.



$$\begin{array}{r} 60 \\ + 30 \\ \hline \end{array} \text{ mph}$$



$$\begin{array}{r} 17 \\ + 11 \\ \hline \end{array} \text{ mph}$$



$$\begin{array}{r} 43 \\ + 10 \\ \hline \end{array} \text{ mph}$$



$$\begin{array}{r} 25 \\ + 23 \\ \hline \end{array} \text{ mph}$$





$$\begin{array}{r} 22 \\ + 67 \\ \hline \end{array} \text{ mph}$$

FASTER, FASTER!, #18

(Continued from page one.)

★ Look at your totals for each car on page one. In the space next to each car below, write down how fast it will go. Which car is the fastest? _____ Which car is the slowest? _____



page two

