

FASTER, FASTER!, #14


★ Add the two numbers together to see how many miles per hour (mph) each race car will go.



$$\begin{array}{r} 30 \\ + 48 \\ \hline \end{array} \text{ mph}$$



$$\begin{array}{r} 46 \\ + 41 \\ \hline \end{array} \text{ mph}$$



$$\begin{array}{r} 23 \\ + 22 \\ \hline \end{array} \text{ mph}$$



$$\begin{array}{r} 14 \\ + 13 \\ \hline \end{array} \text{ mph}$$



$$\begin{array}{r} 10 \\ + 88 \\ \hline \end{array} \text{ mph}$$




page one

(Continued on page two.)

FASTER, FASTER!, #14

(Continued from page one.)

★ Look at your totals for each car on page one. In the space next to each car below, write down how fast it will go. Which car is the fastest? _____ Which car is the slowest? _____



page two

