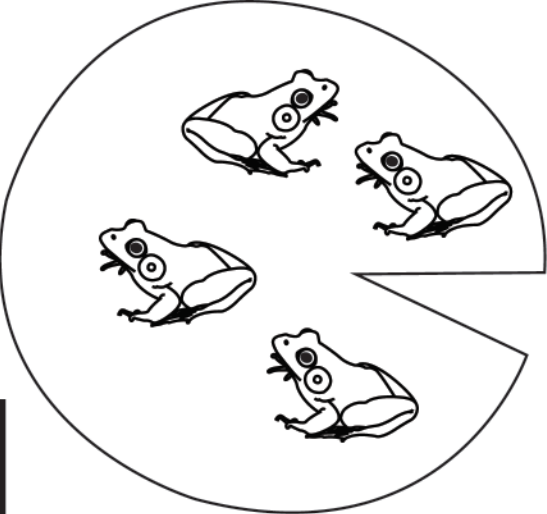
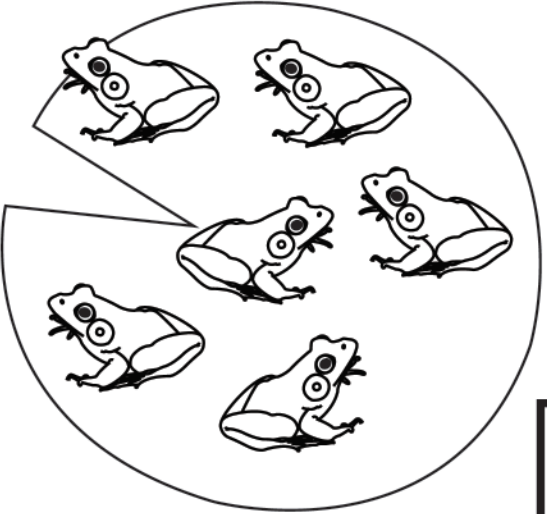
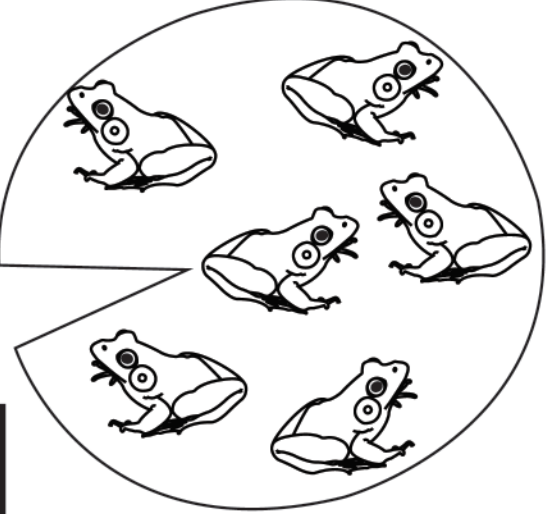
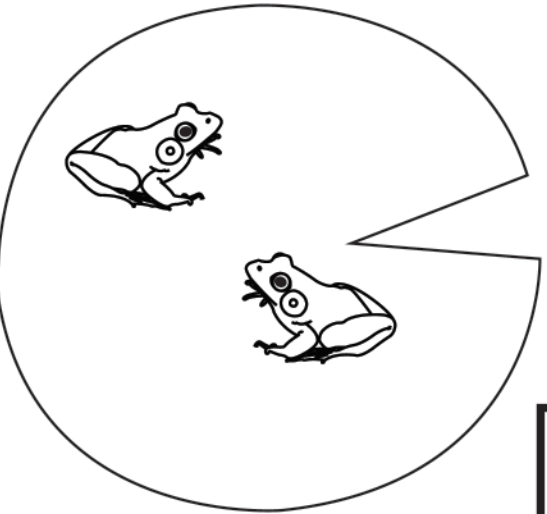

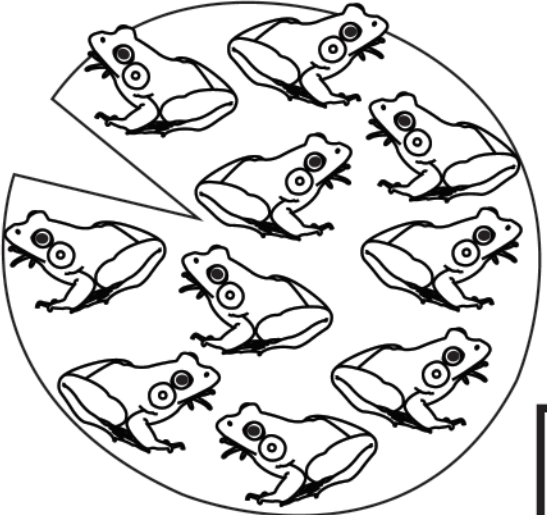


# Fantastic Frogs

Count the frogs on each lily pad. Then, write the total number in the box below each lily pad. Color the lily pad that has more frogs.

|  |   |
|--|---|
|  <p>Total:</p> <input data-bbox="107 720 228 842" type="text"/>     |  <p>Total:</p> <input data-bbox="1398 720 1520 842" type="text"/>     |
|  <p>Total:</p> <input data-bbox="107 1272 228 1394" type="text"/>  |  <p>Total:</p> <input data-bbox="1398 1272 1520 1394" type="text"/>  |
|  <p>Total:</p> <input data-bbox="107 1824 228 1946" type="text"/> |  <p>Total:</p> <input data-bbox="1398 1824 1520 1946" type="text"/> |